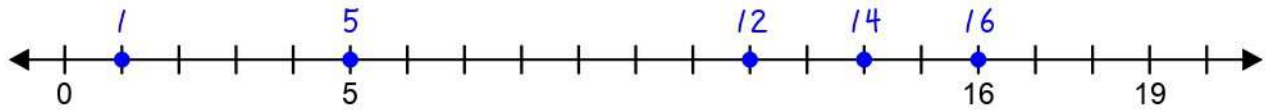
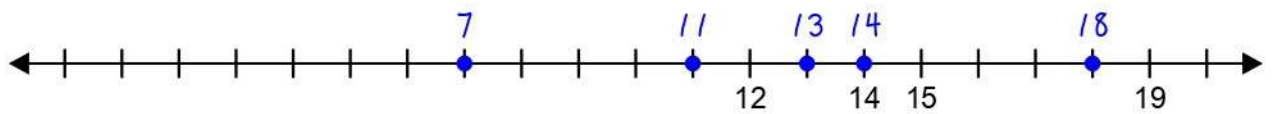


Отметь на числовой прямой заданные числа

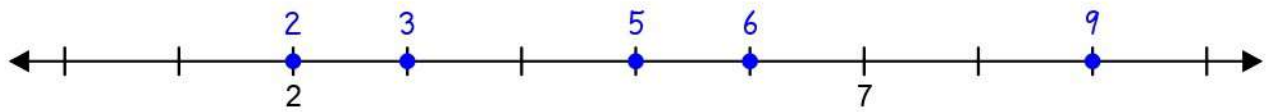
(1)  $\{ 5, 16, 14, 1, 12 \}$



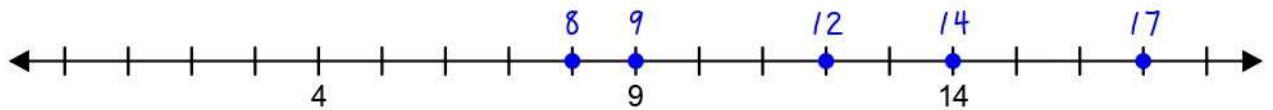
(2)  $\{ 14, 13, 18, 11, 7 \}$



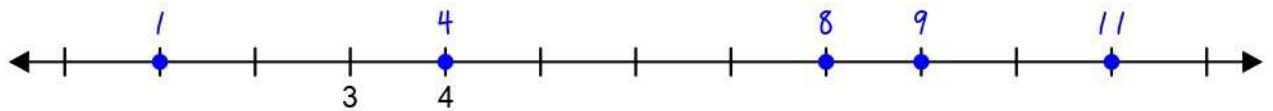
(3)  $\{ 5, 2, 9, 3, 6 \}$



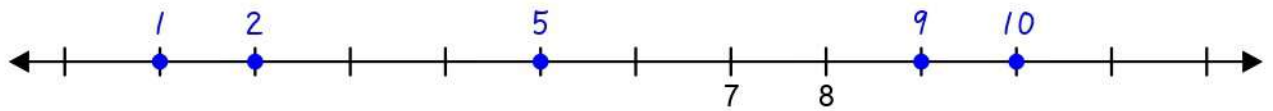
(4)  $\{ 9, 17, 14, 8, 12 \}$



(5)  $\{ 4, 8, 1, 9, 11 \}$

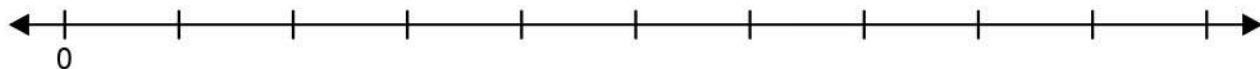


(6)  $\{ 2, 9, 5, 1, 10 \}$

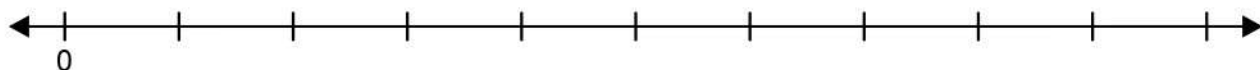


Отметь на числовой прямой заданные числа

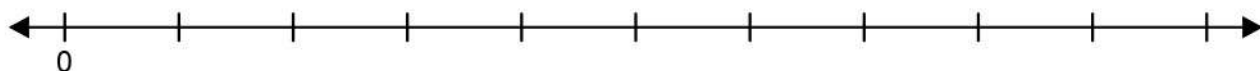
(1)  $\{ 1, 8, 5, 3, 9 \}$



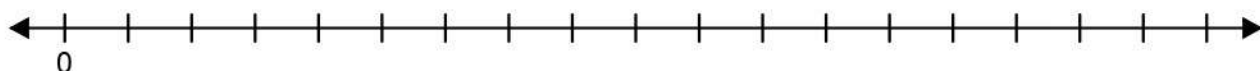
(2)  $\{ 5, 6, 3, 9, 2 \}$



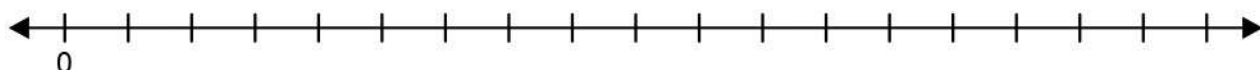
(3)  $\{ 3, 8, 9, 7, 6 \}$



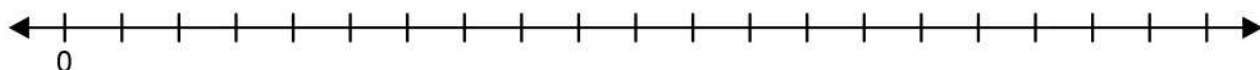
(4)  $\{ 10, 13, 2, 1, 12 \}$



(5)  $\{ 10, 7, 2, 14, 5 \}$

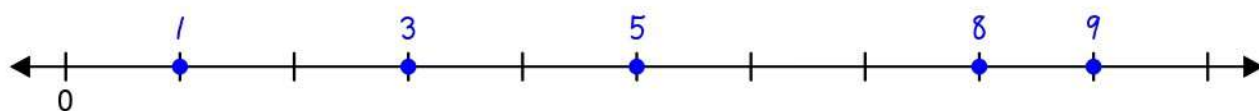


(6)  $\{ 8, 14, 15, 10, 4 \}$

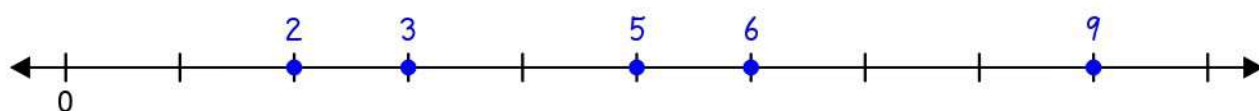


Отметь на числовой прямой заданные числа

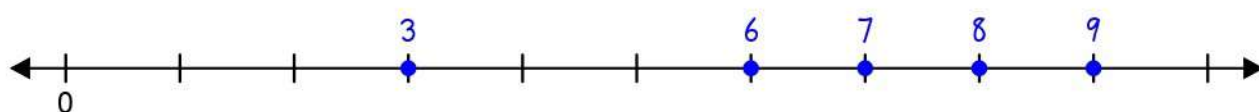
(1)  $\{ 1, 8, 5, 3, 9 \}$



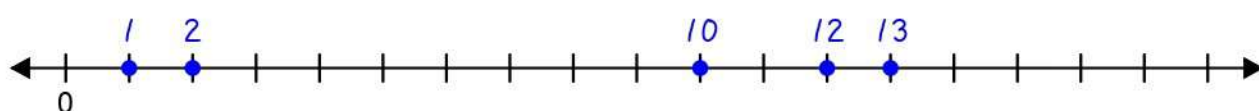
(2)  $\{ 5, 6, 3, 9, 2 \}$



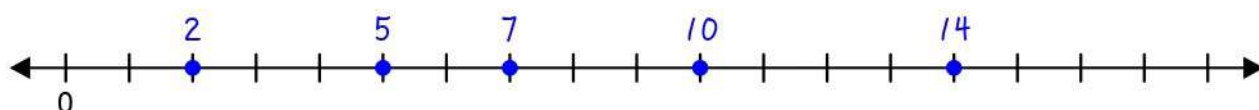
(3)  $\{ 3, 8, 9, 7, 6 \}$



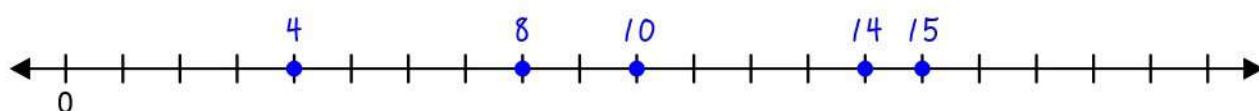
(4)  $\{ 10, 13, 2, 1, 12 \}$



(5)  $\{ 10, 7, 2, 14, 5 \}$

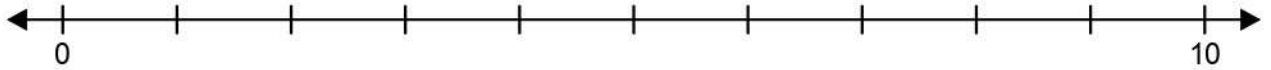


(6)  $\{ 8, 14, 15, 10, 4 \}$

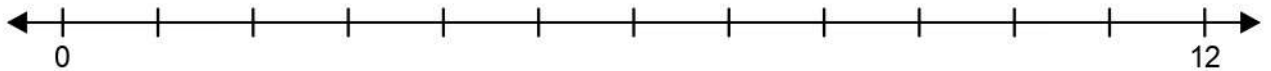


Отметь на числовой прямой  
заданные числа

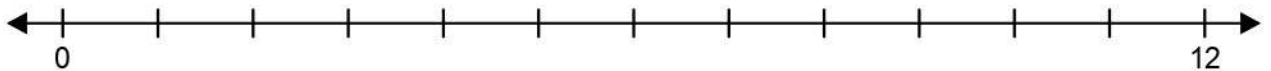
(1)  $\{ 9, 3, 8, 4, 2 \}$



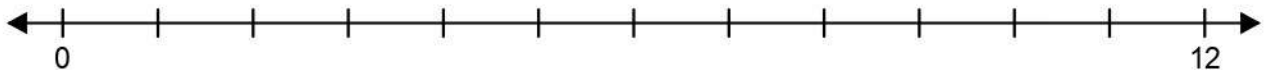
(2)  $\{ 3, 5, 9, 6, 1 \}$



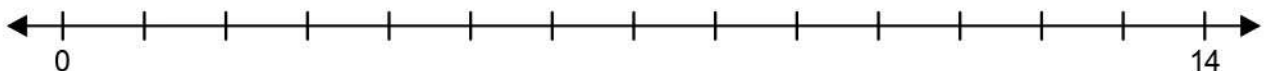
(3)  $\{ 9, 2, 11, 4, 8 \}$



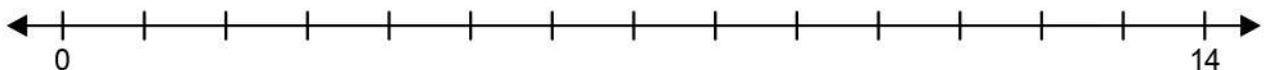
(4)  $\{ 10, 7, 6, 1, 2 \}$



(5)  $\{ 9, 12, 11, 3, 7 \}$

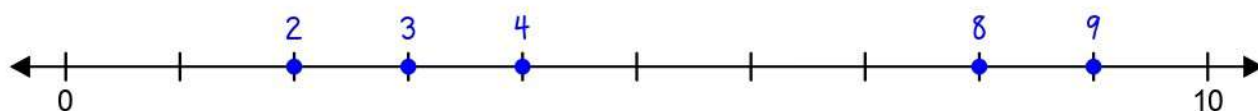


(6)  $\{ 7, 13, 6, 10, 3 \}$

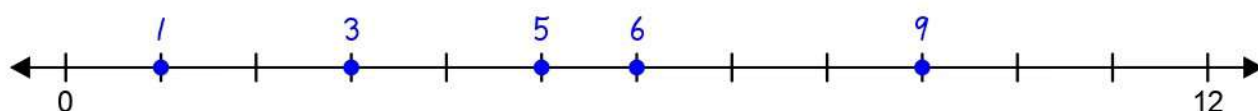


Отметь на числовой прямой  
заданные числа

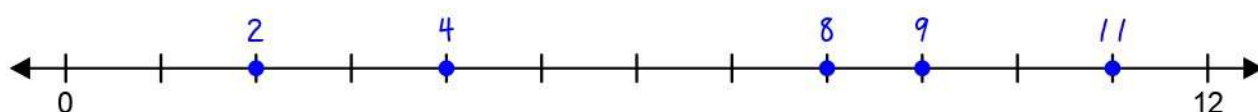
(1)  $\{ 9, 3, 8, 4, 2 \}$



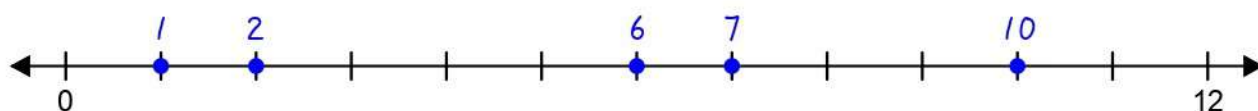
(2)  $\{ 3, 5, 9, 6, 1 \}$



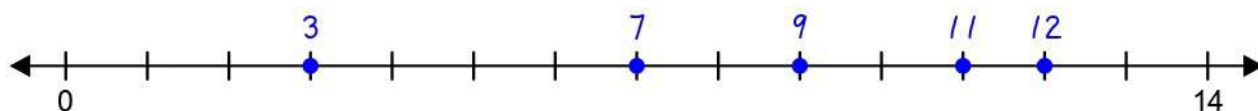
(3)  $\{ 9, 2, 11, 4, 8 \}$



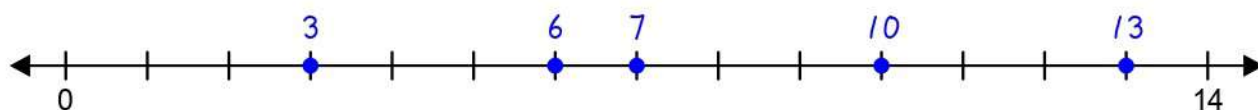
(4)  $\{ 10, 7, 6, 1, 2 \}$



(5)  $\{ 9, 12, 11, 3, 7 \}$

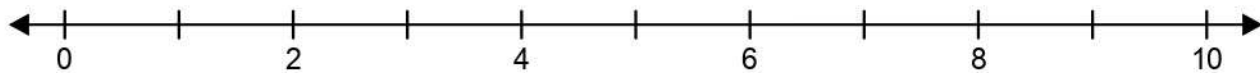


(6)  $\{ 7, 13, 6, 10, 3 \}$

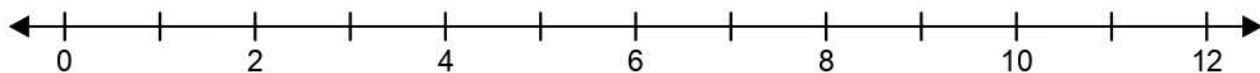


Отметь на числовой прямой  
заданные числа

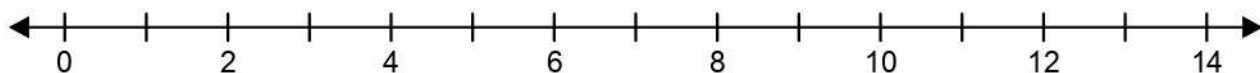
(1)  $\{ 4, 8, 6, 3, 5 \}$



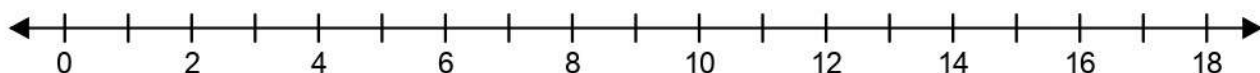
(2)  $\{ 6, 8, 10, 3, 4 \}$



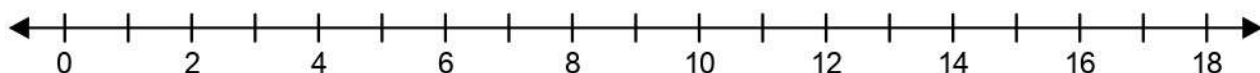
(3)  $\{ 6, 7, 10, 9, 8 \}$



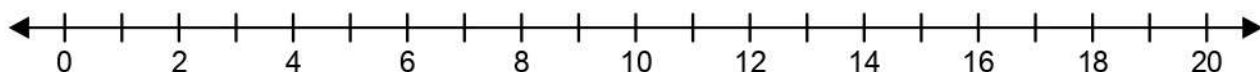
(4)  $\{ 11, 12, 1, 15, 8 \}$



(5)  $\{ 2, 1, 12, 5, 10 \}$

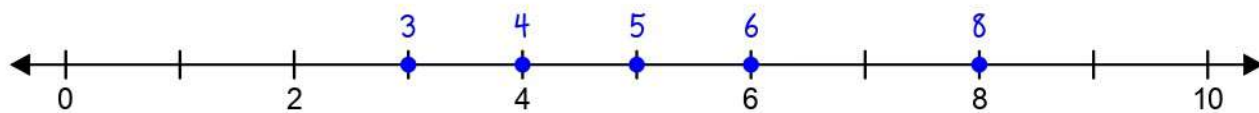


(6)  $\{ 12, 9, 19, 4, 11 \}$

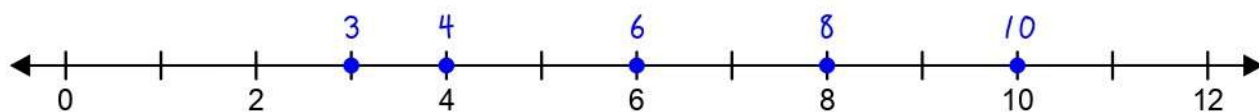


Отметь на числовой прямой  
заданные числа

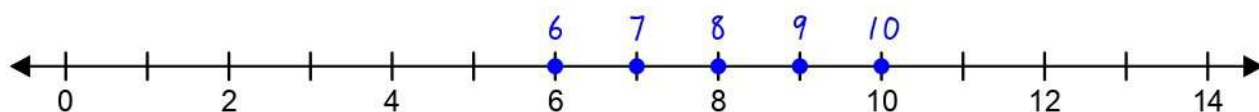
(1)  $\{ 4, 8, 6, 3, 5 \}$



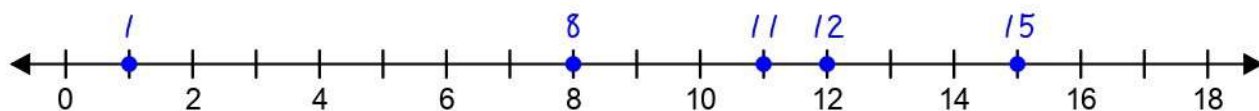
(2)  $\{ 6, 8, 10, 3, 4 \}$



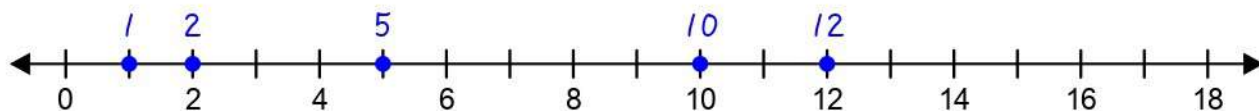
(3)  $\{ 6, 7, 10, 9, 8 \}$



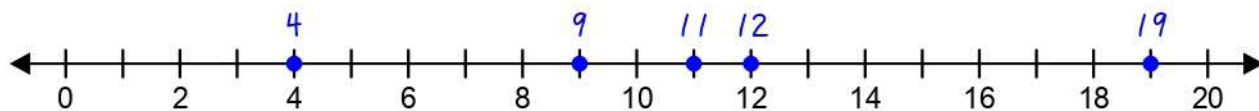
(4)  $\{ 11, 12, 1, 15, 8 \}$



(5)  $\{ 2, 1, 12, 5, 10 \}$

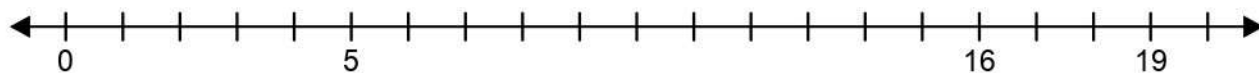


(6)  $\{ 12, 9, 19, 4, 11 \}$

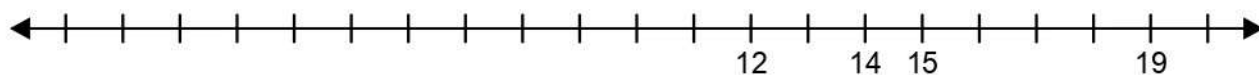


Отметь на числовой прямой заданные числа

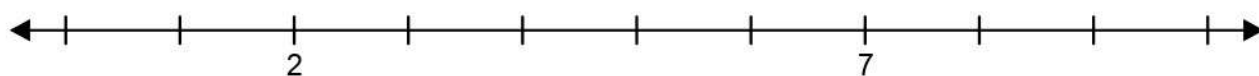
(1)  $\{ 5, 16, 14, 1, 12 \}$



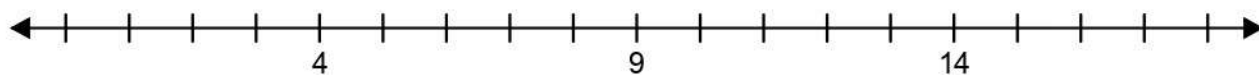
(2)  $\{ 14, 13, 18, 11, 7 \}$



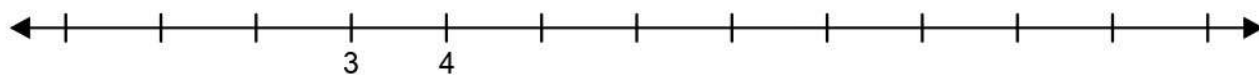
(3)  $\{ 5, 2, 9, 3, 6 \}$



(4)  $\{ 9, 17, 14, 8, 12 \}$



(5)  $\{ 4, 8, 1, 9, 11 \}$



(6)  $\{ 2, 9, 5, 1, 10 \}$

